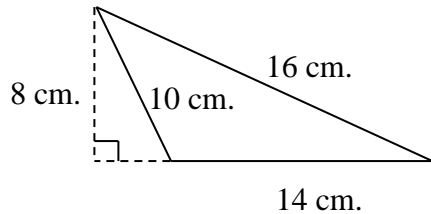


# PERIMETER & AREA WORKSHEET

Find the Perimeter AND Area of the following figures. Label all answers with the proper units of measurement.

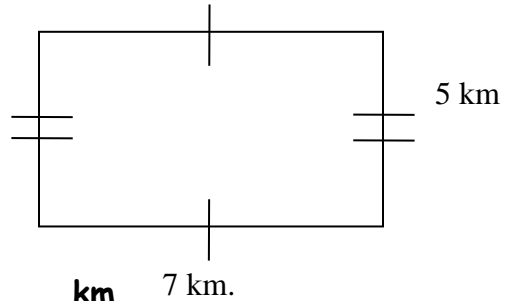
1)



Perimeter:    cm

Area:    cm<sup>2</sup>

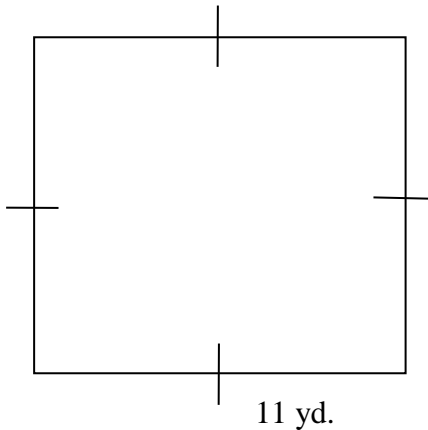
2)



Perimeter:    km

Area:    km<sup>2</sup>

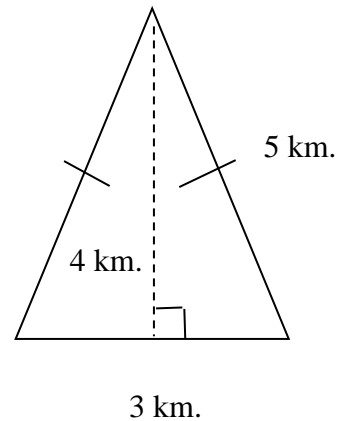
3)



Perimeter:    yd.

Area:    yd<sup>2</sup>

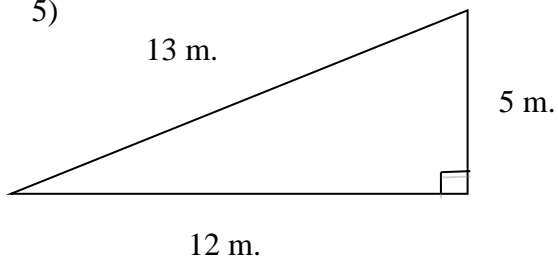
4)



Perimeter:    km

Area:    km<sup>2</sup>

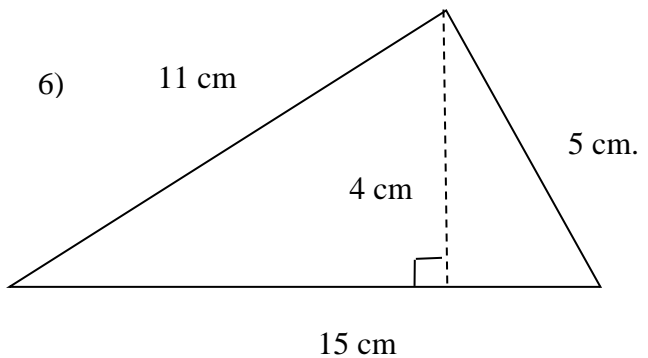
5)



Perimeter:    m

Area:    m<sup>2</sup>

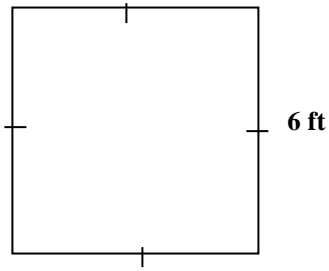
6)



Perimeter:    cm

Area:    cm<sup>2</sup>

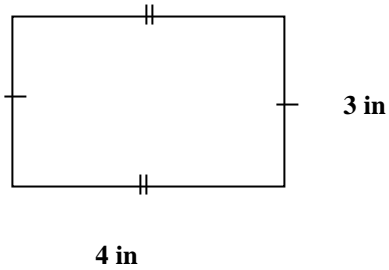
7



Explain how to find the area.

Find the perimeter.

8

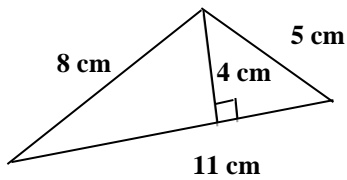


Find the area and perimeter.

**Perimeter:**      **in**

**Area:**      **in<sup>2</sup>**

9

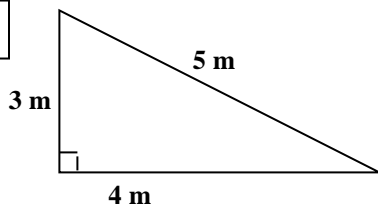


Find the area and perimeter.

**Perimeter:**      **cm**

**Area:**      **cm<sup>2</sup>**

10

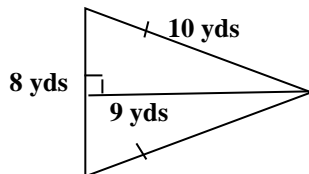


Find the area and perimeter.

**Perimeter:**      **m**

**Area:**      **m<sup>2</sup>**

11



Find the area and perimeter.

**Perimeter:**      **yards**

**Area:**      **yd<sup>2</sup>**